

# Year 9F Homework – Half Term 2

## Homework 1 – Due: \_\_\_\_\_

Make sure you log on to HegartyMaths for help if you need it.

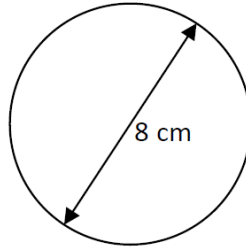
Multiplying Decimals (48)



$$3 \times 1.2$$

Circumference (534)

Calculate the circumference (2dp):

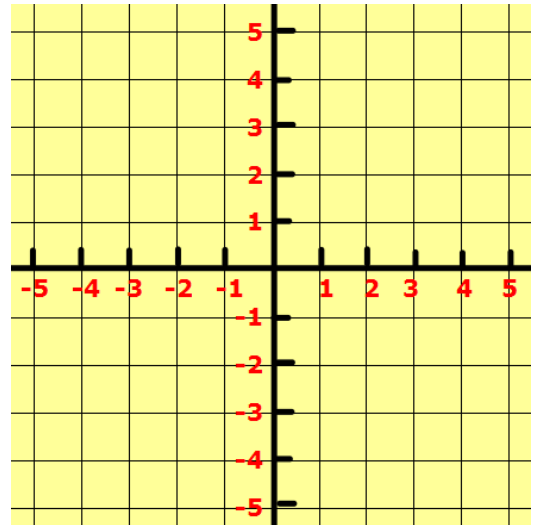


Drawing Straight Line Graphs (206)

Complete the table of values and plot:

$$y = 4x + 3$$

$x$	-3	-2	-1	0	1	2	3
$y$							



## Homework 2 – Due: \_\_\_\_\_

Log onto HegartyMaths to watch the video and complete the quiz online. **Topic:** \_\_\_\_\_

My score was: \_\_\_\_\_

## Homework 3 – Due: \_\_\_\_\_

Make sure you log on to HegartyMaths for help if you need it.

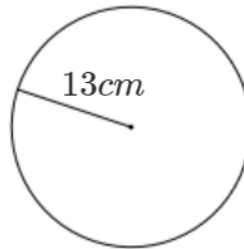
Multiplying Decimals (48)

$$0.3 \times 1.2$$



Circumference (534)

Calculate the circumference (2dp):

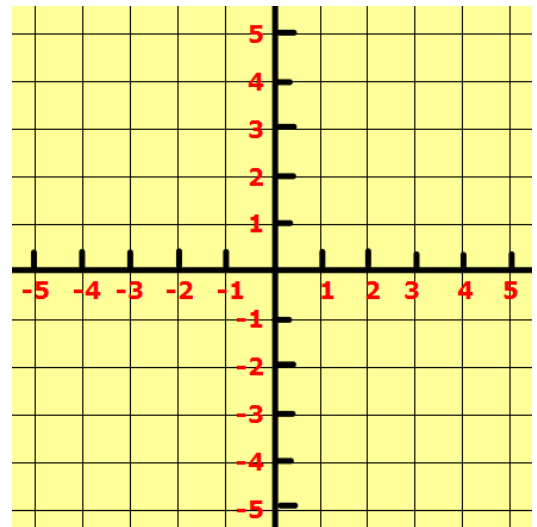


Drawing Straight Line Graphs (206)

Complete the table of values and plot:

$$y = 5x - 2$$

$x$	-3	-2	-1	0	1	2	3
$y$							



## Homework 4 – Due: \_\_\_\_\_

Log onto HegartyMaths to watch the video and complete the quiz online. **Topic:** \_\_\_\_\_

My score was: \_\_\_\_\_

## Homework 5 – Due: \_\_\_\_\_

Make sure you log on to HegartyMaths for help if you need it.

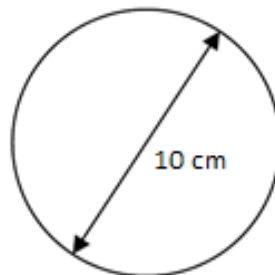
Multiplying Decimals (48)

$$2 \times 0.88$$



Circumference (534)

Calculate the circumference (2dp):

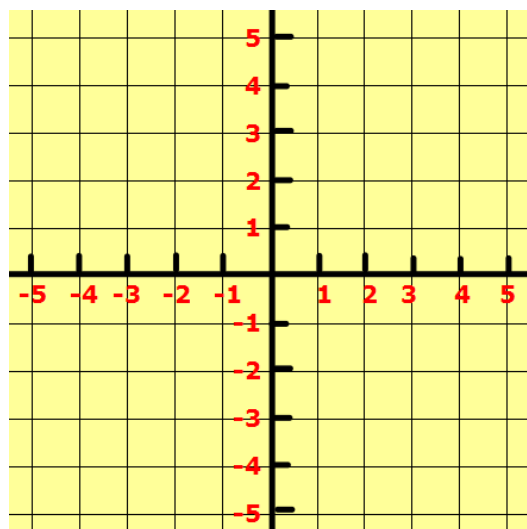


Drawing Straight Line Graphs (206)

Complete the table of values and plot:

$$y = 4x - 1$$

$x$	-3	-2	-1	0	1	2	3
$y$							



## Homework 6 – Due: \_\_\_\_\_

Log onto HegartyMaths to watch the video and complete the quiz online. **Topic:** \_\_\_\_\_

My score was: \_\_\_\_\_