

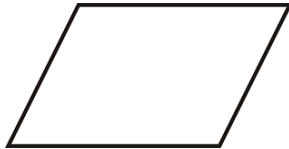
# Year 8F Homework – Half Term 3

## Homework 1 – Due: \_\_\_\_\_

Make sure you log on to HegartyMaths for help if you need it.  
The clip number is shown with the topic.

Quadrilaterals (824)

What is the name of this shape?



Divisibility Tests (26)

Is 36912 divisible by 6?



Multiplying Fractions (68)

$$\frac{3}{7} \times \frac{1}{9}$$



Constructions with a Protractor (666)

Using a protractor, construct an equilateral triangle with side length 3cm.

## Homework 2 – Due: \_\_\_\_\_

Log onto HegartyMaths to watch the video and complete the quiz online. **Topic:** \_\_\_\_\_

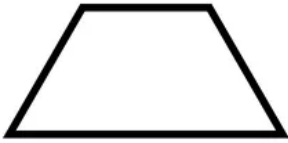
My score was: \_\_\_\_\_

## Homework 3 – Due: \_\_\_\_\_

Make sure you log on to HegartyMaths for help if you need it.  
The clip number is shown with the topic.

Quadrilaterals (824)

What is the name of this shape?



Divisibility Tests (26)

Is 72678 divisible by 3?



Multiplying Fractions (68)

$$\frac{4}{9} \times \frac{6}{7}$$



Rotational Symmetry (828)

What is the order of rotational symmetry?



## Homework 4 – Due: \_\_\_\_\_

Log onto HegartyMaths to watch the video and complete the quiz online. **Topic:** \_\_\_\_\_

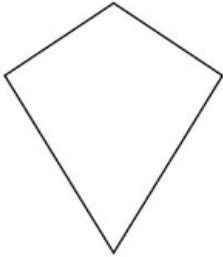
My score was: \_\_\_\_\_

## Homework 5 – Due: \_\_\_\_\_

Make sure you log on to HegartyMaths for help if you need it.  
The clip number is shown with the topic.

Quadrilaterals (824)

What is the name of this shape?



Divisibility Tests (26)

Is 64590 divisible by 5?



Multiplying Fractions (68)

$$\frac{3}{8} \times \frac{3}{8}$$



Rotational Symmetry (828)

What is the order of rotational symmetry?



## Homework 6 – Due: \_\_\_\_\_

Log onto HegartyMaths to watch the video and complete  
the quiz online. **Topic:** \_\_\_\_\_

My score was: \_\_\_\_\_